

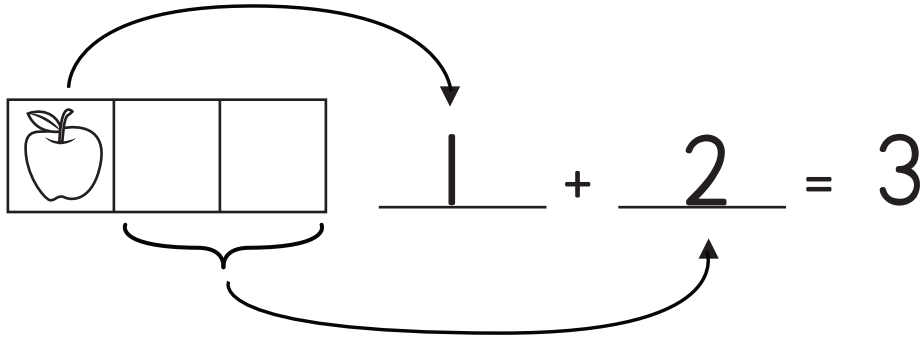
Name: _____

Different Ways to Make Number 3

In each row, count and then write the number of apples on the first line.

Count how many more apples are needed to get to three
and write the number on the second line. Next, say the number sentence.


Example





Say the number sentence: "One plus two equals three."

--	--	--




$$\underline{\quad} + \underline{\quad} = 3$$

		
---	--	--

$$\underline{\quad} + \underline{\quad} = 3$$

		
---	---	--

$$\underline{\quad} + \underline{\quad} = 3$$

		
---	---	---

$$\underline{\quad} + \underline{\quad} = 3$$